

Name _____ Date _____

Lesson Title _____

Maryland

Founded by _____

Reasons

1. _____

2. _____

Life in Maryland and Virginia

_____ climate _____ soil

Crop _____

Similar _____

Maryland passed _____

The Carolina Colonies

Split into _____

and _____

North Carolina crops _____

South Carolina's most important crop _____


Large part of population _____

Georgia

Founder _____

Settlers were _____

Economy grew as a result of _____ and _____



Conflicts with Native Americans

What happened to Native Americans

Heading West

When _____

Where _____

Trail _____

© Harcourt

Settling the South

DIRECTIONS Choose the correct term from the box to complete the chart.

as a safe place for Catholics	enslaved Africans
wealthy English family	the colony split into two
the Lords Proprietors	moved south to get more land
James Oglethorpe	1633
to give debtors a new start.	English

SETTLING THE SOUTH			
Where	Who	Why	When
Maryland	1. Founder: the Calverts, a _____ _____	2. _____ _____	3. _____ _____
	First proprietor: Cecilius Calvert First governor: Leonard Calvert	and to make money	
Carolina	4. Founders: _____ _____	6. _____ _____	7. founded 1663; in 1712: _____ _____
	5. First colonists: English settlers, wealthy landowners from the West Indies, and _____		
Georgia	8. Founder: _____ _____	10. _____ _____	1733
	9. First colonists: _____ _____		

© Harcourt

(continued)

DIRECTIONS Use the completed chart on page 61 to help you answer these questions.

1 Which colony was set up to help debtors?

2 What happened in Carolina in 1712?

3 Which colony did the Calverts found?

4 Which group wanted religious freedom in Maryland?

5 Who were the Lords Proprietors?


6 Which colony was founded 100 years after the Maryland Colony?

7 Who were the Calverts?

8 Where did many colonists settle as more people moved to Maryland and Virginia?

9 Who founded the Georgia Colony? When was it founded?

10 Which colony had settlers from the West Indies?



James Oglethorpe

Name _____ Date _____

Lesson Title _____

Slavery and Society

Treatment of Enslaved People


The way slaves were treated depended on _____

How enslaved people kept their culture alive

A Farming Economy


Economy based mostly on _____

What made owners rich _____



The Plantation System

What some plantations looked like _____



Life on Small Farms

Most owners did not

Free Africans

What a few were able to do _____

Where some runaways found safety _____

The Black Seminoles Who they were _____

Fort Mose What it was _____

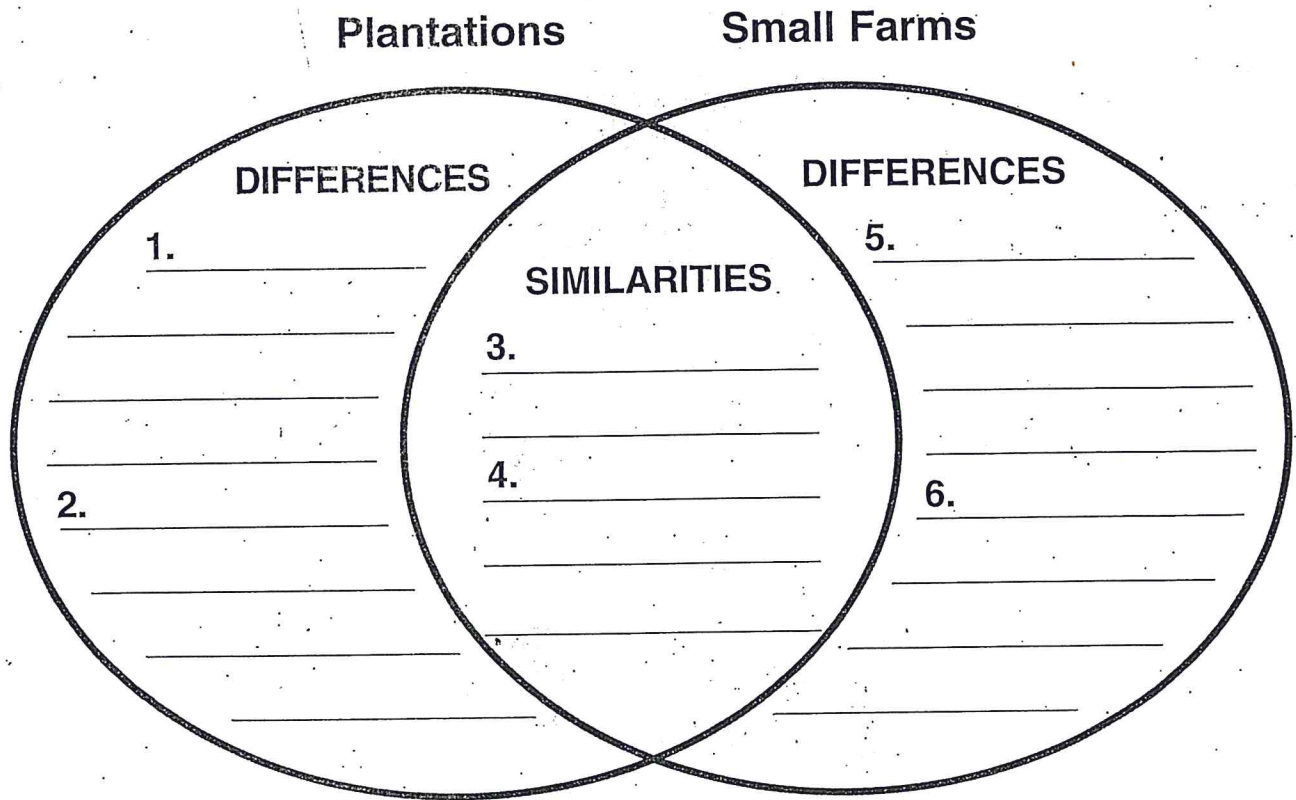
Life in the South

DIRECTIONS Read the passage below. Use the information it contains to complete the Venn diagram, comparing and contrasting life in the South.

Plantations and Small Farms


Many Southern colonists lived and worked on small farms. They planted and harvested their own crops. The owners of small farms did most of the work themselves. Few of them owned slaves. Many families on small farms lived in one-story houses, far from their neighbors.

People on plantations also lived far from others. However, many families lived on plantation land. Some plantations looked like small villages, with many buildings circling the owner's home. Some buildings were workshops where enslaved Africans made nails, bricks, barrels, and other items used on the plantation. The kitchen was in a building by itself. Plantation owners often lived in large houses. Many of the plantations in the Southern Colonies ran themselves. Planters grew food, and skilled workers made needed goods. Enslaved Africans did most of the work on the plantations.



Name _____ Date _____

Lesson Title _____



Cash Crops

Adapting to the Climate

Crop _____ Where _____

Crop _____ Where _____

Crop _____ Where _____

The Economy Grows

Exporting Goods

How plantation owners sold crops _____

Where most successful plantations were _____


Why _____

What Baltimore became _____

Other Industries

Important natural resources _____

Products _____



The Southern Economy

DIRECTIONS Answer the questions below.

- ① Which cash crop grew well on warm, wet land? _____
- ② Why did the cash crop indigo help the Southern economy?

- ③ Besides agriculture and trade, what were two industries in the Southern Colonies? _____

- ④ What role did brokers play in the Southern economy? _____

- ⑤ How do you think enslaved African workers added to the economic success of the Southern Colonies?



Skills: Compare Maps with Different Scales

DIRECTIONS Answer the questions below by choosing the map on page 64 that best answers the question.

① Which map could you use to find the distance from Alexandria to Williamsburg?

② Which map could you use to find the distance between Henrico and Jamestown?

③ Which map would you use to find the distance from Norfolk to Richmond? _____ Explain why.

④ What is the distance between Norfolk and Richmond in miles?

⑤ Which map could you use to find the distance from Fredericksburg to Jamestown? _____ What is the distance in miles?

⑥ What is the distance in miles going due west from Norfolk to the Roanoke River

⑦ Which map would you use to find the New River? _____

⑧ Which map would you choose if you wanted to plan a trip from Newport News to Fredericksburg? _____

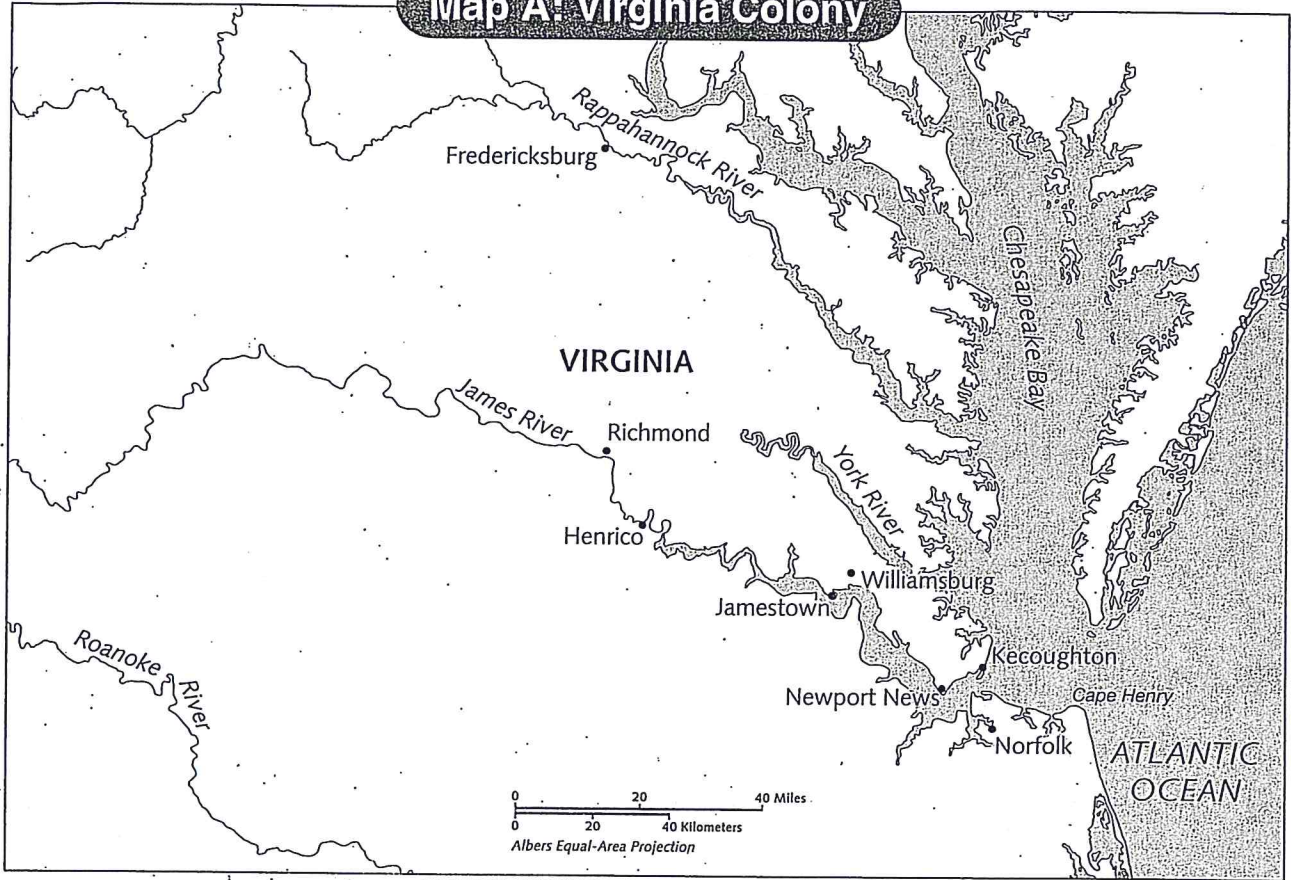
Why? _____

⑨ Which map would you choose if you were going to show someone where you wanted to start a settlement on Chesapeake Bay? _____

Explain why. _____

(continued)

Map A: Virginia Colony



Map B: Virginia Colony

